

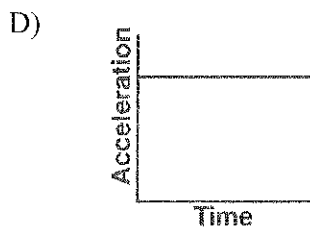
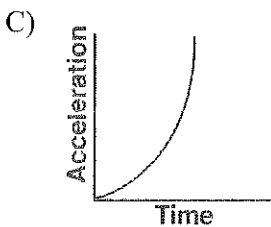
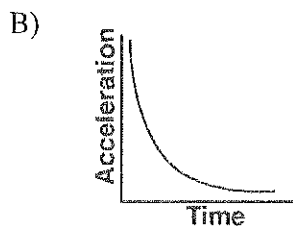
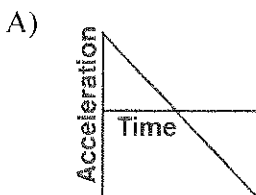
Topic 2B - Free Fall

Skill 14

64. A rock is dropped from a bridge. What happens to the magnitude of the acceleration and the speed of the rock as it falls? [Neglect friction.]

- A) Both acceleration and speed increase.
- B) Both acceleration and speed remain the same.
- C) Acceleration increases and speed decreases.
- D) Acceleration remains the same and speed increases.

65. Which graph best represents the relationship between the acceleration of an object falling freely near the surface of Earth and the time that it falls?



Topic 2B - Free Fall

66. An object is dropped from rest and falls freely 20. meters to Earth. When is the speed of the object 9.8 meters per second?

- A) during the entire first second of its fall
- B) at the end of its first second of fall
- C) during its entire time of fall
- D) after it has fallen 9.8 meters

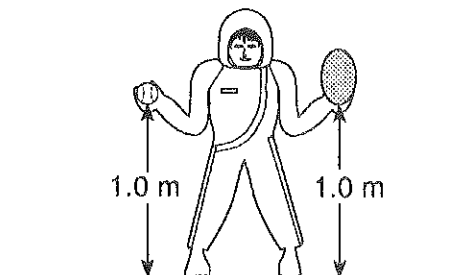
67. A 4.0-kilogram rock and a 1.0-kilogram stone fall freely from rest from a height of 100 meters. After they fall for 2.0 seconds, the ratio of the rock's speed to the stone's speed is

- A) 1:1 B) 1:2 C) 2:1 D) 4:1

68. A rock dropped off a bridge takes 5 seconds to hit the water. Approximately what was the rock's velocity just before impact?

- A) 5 m/s B) 2 m/s
C) 50 m/s D) 125 m/s

69. As shown in the diagram below, an astronaut on the Moon is holding a baseball and a balloon. The astronaut releases both objects at the same time.



What does the astronaut observe?

[Note: The Moon has no atmosphere.]

- A) The baseball falls slower than the balloon.
- B) The baseball falls faster than the balloon.
- C) The baseball and balloon fall at the same rate.
- D) The baseball and balloon remain suspended and do not fall.

70. Which is constant for a freely falling object?

- A) displacement B) speed
C) velocity D) acceleration

71. A book of mass m falls freely from rest to the floor from the top of a desk of height h . What is the speed of the book upon striking the floor?

- A) $\sqrt{2gh}$ B) $2gh$
C) mgh D) mh

Topic 2B - Free Fall

72. A baseball dropped from the roof of a tall building takes 3.1 seconds to hit the ground. How tall is the building? [Neglect friction.]

- A) 15 m B) 30. m
C) 47 m D) 94 m

73. What is the speed of a 2.5-kilogram mass after it has fallen freely from rest through a distance of 12 meters?

- A) 4.8 m/s B) 15 m/s
C) 30. m/s D) 43 m/s

74. A rock falls freely from rest near the surface of a planet where the acceleration due to gravity is 4.0 meters per second². What is the speed of this rock after it falls 32 meters?

- A) 8.0 m/s B) 16 m/s
C) 25 m/s D) 32 m/s

75. A 5.0-kilogram sphere, starting from rest, falls freely 22 meters in 3.0 seconds near the surface of a planet. Compared to the acceleration due to gravity near Earth's surface, the acceleration due to gravity near the surface of the planet is approximately

- A) the same
B) twice as great
C) one-half as great
D) four times as great

76. An astronaut standing on a platform on the Moon drops a hammer. If the hammer falls 6.0 meters vertically in 2.7 seconds, what is its acceleration?

- A) 1.6 m/s² B) 2.2 m/s²
C) 4.4 m/s² D) 9.8 m/s²

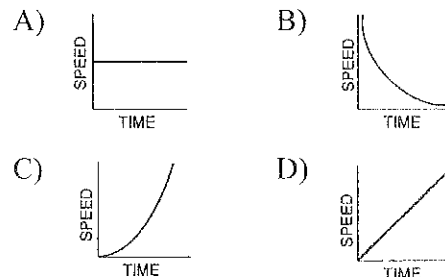
77. A rock falls from rest a vertical distance of 0.72 meter to the surface of a planet in 0.63 second. The magnitude of the acceleration due to gravity on the planet is

- A) 1.1 m/s² B) 2.3 m/s²
C) 3.6 m/s² D) 9.8 m/s²

78. An object dropped from rest will have a velocity of approximately 30. meters per second at the end of

- A) 1.0 s B) 2.0 s C) 3.0 s D) 4.0 s

79. Which graph best represents the motion of a freely falling body near the Earth's surface?



Topic 2B - Free Fall

-
80. A freely falling object near the Earth's surface travels downward at a constant
- A) acceleration of 1.00 m/s^2
 - B) acceleration of 9.81 m/s^2
 - C) velocity of 1.00 m/s
 - D) velocity of 9.81 m/s
81. An object, initially at rest, falls freely near the Earth's surface. How long does it take the object to attain a speed of 98 meters per second?
- A) 0.1 sec B) 10 sec
 - C) 98 sec D) 960 sec
82. As a body falls freely near the surface of the Earth, its acceleration
- A) decreases
 - B) increases
 - C) remains the same
83. If the mass of an object were doubled, its acceleration due to gravity would be
- A) halved B) doubled
 - C) unchanged D) quadrupled
84. A rock falls from rest off a high cliff. How far has the rock fallen when its speed is 39.2 meters per second? [Neglect friction.]
- A) 19.6 m B) 44.1 m
 - C) 78.3 m D) 123 m
85. An acorn dropped from rest by a squirrel, falls approximately 45 cm in 0.3 seconds. How much time will it take for the acorn to fall 90 cm?
- A) 0.6 seconds B) 0.18 seconds
 - C) 0.42 seconds D) 0.3 seconds
86. A space craft drops a sensor onto the Comet Tempel 1 from a height of 20m. The fall takes 14 seconds. What is the landing speed of the sensor? [Hint: This is a multi-step problem]
- A) 2.8 m/s B) 0.2 m/s
 - C) 1.4 m/s D) 0.7 m/s
87. An object in free fall can be described as
- A) equilibrium
 - B) experiencing zero net force
 - C) experiencing a constant net force
 - D) experiencing a changing net force
-

Topic 2B - Free Fall

88. A space craft traveling with an initial speed of $3.2 \times 10^3 \text{ m/s}$ encounters a gravitational field that causes it to accelerate at 12 m/s^2 for 4 min. What is the final speed of the space craft?

- A) $6.080 \times 10^3 \text{ m/s}$ B) $3.248 \times 10^3 \text{ m/s}$
C) $2.880 \times 10^3 \text{ m/s}$ D) $4.8 \times 10^1 \text{ m/s}$

89. A rocket is launched downward with an initial launch velocity of 40 m/s and then pulled by the Earth's gravitational field. The launch occurs 750 m above the Earth's surface. What is the magnitude of the rocket's final velocity?

- A) $1.3 \times 10^2 \text{ m/s}$ B) $1.6 \times 10^4 \text{ m/s}$
C) $1.2 \times 10^2 \text{ m/s}$ D) $6.7 \times 10^1 \text{ m/s}$
-

Topic 2B - Free Fall

90. Base your answer to the following question on the information below.

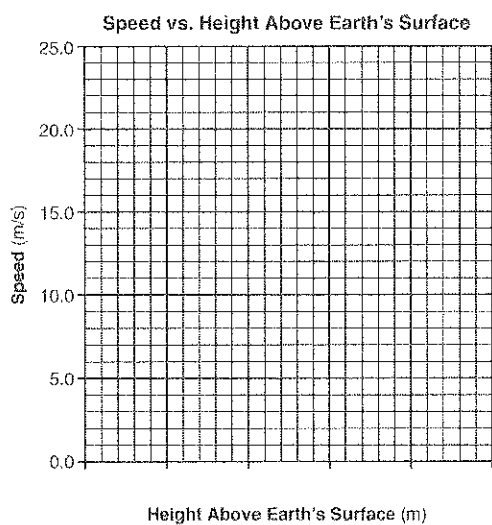
A 1.00-kilogram mass was dropped from rest from a height of 25.0 meters above Earth's surface. The speed of the mass was determined at 5.0-meter intervals and recorded in the data table below

Using the information in the data table, construct a graph on the grid below, following the directions below.

Data Table

Height Above Earth's Surface (m)	Speed (m/s)
25.0	0.0
20.0	9.9
15.0	14.0
10.0	17.1
5.0	19.8
0	22.1

Mark an appropriate scale on the axis labeled "Height Above Earth's Surface (m)." Create a "best curve" line based on plot.



Topic 2B - Free Fall

91. Using your graph, determine the speed of the mass after it has fallen a vertical distance of 12.5 meters. How is the speed different from the velocity in this scenario?

92. As the distance of the fall doubles, what happens to the velocity of the object? [Hint think about the equation that relates final velocity and distance for a falling object]

93. If the landing velocity when dropped from 25m is v_f , what would be the landing velocity in terms of v_f when dropped from 50m
